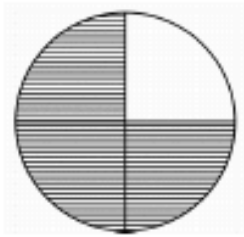


- 1 What fraction of this shape is shaded?



- A $\frac{1}{3}$ B $\frac{1}{4}$
 C $\frac{1}{5}$ D Pacman

- 2 $1800 + 200 + 873$ is closest to

- A $700 + 200 + 2000$
 B $800 + 200 + 1500$
 C $800 + 300 + 1200$
 D OMG! It's Tracy's phone no.

- 3 1.27 km is the same as

- A Too far to drag your sorry ass to school
 B 12.7 m
 C 1270 m
 D 0.127 m

- 4 Which number comes next in this number pattern?

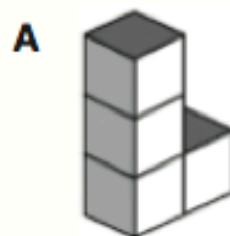
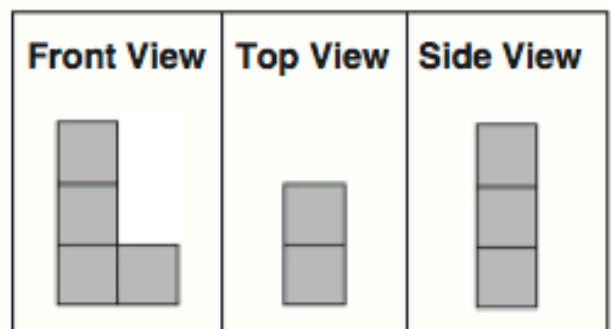
5, 11, 23, 47, 🍎,

- A 96 B 🍌
 C 143 D π

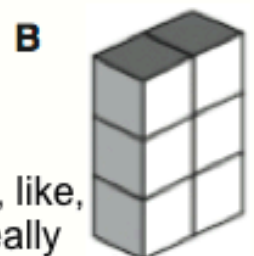
- 5 Yoogole sleeps 8 hrs a day and eats 2 donuts every hr he is awake.
 How many donuts will Yoogole eat in 'n' days?

- A $8n + 1$ cola
 B $12(n - 2) + 1$ feel sick.
 C $2n \times 16 +$ Shouldn't he be eating apples?
 D Forget **n**. RUN FOR IT. He's about to explode.

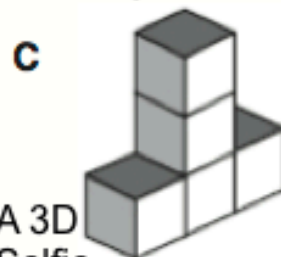
- 6 Sami is a Year 8 student. He is making a 3D shape by stacking blocks. What is Sami trying to make?



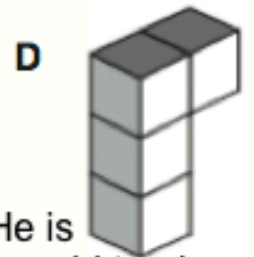
A gun



A, like, really dumb smart phone



A 3D Selfie
The idiot



He is too old to play with blocks.